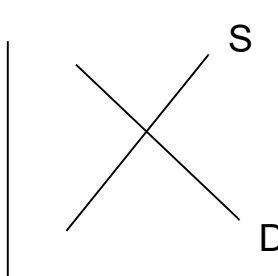
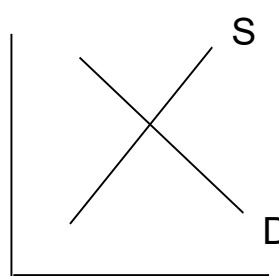
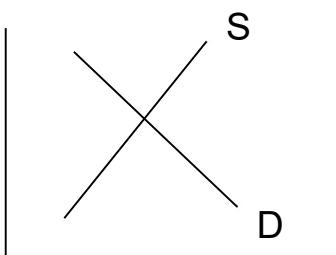
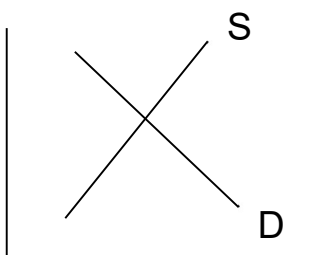
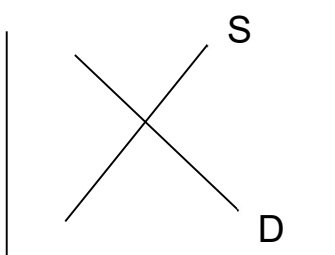
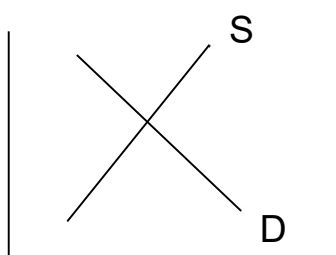


Demand	Supply																												
<p>Demand Schedule</p> <table border="1" data-bbox="521 180 777 564"> <thead> <tr> <th>Price</th> <th>Quantity</th> </tr> </thead> <tbody> <tr><td>\$1</td><td>35</td></tr> <tr><td>\$2</td><td>30</td></tr> <tr><td>\$3</td><td>25</td></tr> <tr><td>\$4</td><td>20</td></tr> <tr><td>\$5</td><td>15</td></tr> <tr><td>\$6</td><td>10</td></tr> </tbody> </table>	Price	Quantity	\$1	35	\$2	30	\$3	25	\$4	20	\$5	15	\$6	10	<p>Supply Schedule</p> <table border="1" data-bbox="1227 180 1484 564"> <thead> <tr> <th>Price</th> <th>Quantity</th> </tr> </thead> <tbody> <tr><td>\$1</td><td>10</td></tr> <tr><td>\$2</td><td>15</td></tr> <tr><td>\$3</td><td>20</td></tr> <tr><td>\$4</td><td>25</td></tr> <tr><td>\$5</td><td>30</td></tr> <tr><td>\$6</td><td>35</td></tr> </tbody> </table>	Price	Quantity	\$1	10	\$2	15	\$3	20	\$4	25	\$5	30	\$6	35
Price	Quantity																												
\$1	35																												
\$2	30																												
\$3	25																												
\$4	20																												
\$5	15																												
\$6	10																												
Price	Quantity																												
\$1	10																												
\$2	15																												
\$3	20																												
\$4	25																												
\$5	30																												
\$6	35																												
<p>Demand Curve (Graph your demand schedule)</p>	<p>Supply Curve (Graph your supply schedule)</p>																												
<p>Demand is</p>	<p>Supply is</p>																												
<p>Law of Demand</p> <p>P ___ QD ___</p> <p>P ___ QD ___</p> <p>An _____ relationship exists between price and quantity demanded</p>	<p>Law of Supply</p> <p>P ___ QS ___</p> <p>P ___ QS ___</p> <p>A _____ relationship exists between price and quantity supplied</p>																												
<p>What causes a change in Quantity Demanded</p>	<p>What causes a change in Quantity Supplied</p>																												
<p>What are the non-price determinants of Demand</p> <p>T</p> <p>R</p> <p>R</p> <p>I</p> <p>I</p> <p>P</p> <p>E</p>	<p>What are the non-price determinants of Supply</p> <p>A</p> <p>C</p> <p>E</p> <p>I</p> <p>N</p> <p>G</p> <p>G</p> <p>G</p>																												

Demand	Supply
Draw a graph indicating an increase in Demand	Draw a graph indicating an increase in Supply
Draw a graph indicating a decrease in Demand	Draw a graph indicating a decrease in Supply
Draw a graph indicating an increase in Quantity Demanded	Draw a graph indicating an increase in Quantity Supplied
Draw a graph indicating a decrease in Quantity Demanded	Draw a graph indicating a decrease in Quantity Supplied

MEP

Draw in a Price Floor , which indicates a _____ 	Draw in a Price Ceiling , which indicates a _____ 
---	---

Draw increase in Demand  Pe _____ Qe _____	Draw decrease in Demand  Pe _____ Qe _____	Draw increase in Supply  Pe _____ Qe _____	Draw decrease in Supply  Pe _____ Qe _____
---	---	--	---